

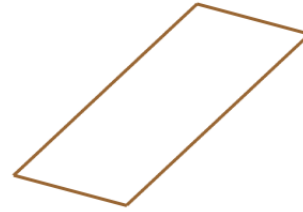
## Classify Quadrilaterals Worksheet

Classify (name) the quadrilaterals.


1 a.



1 b.



2 a.



2 b.



3 a.



3 b.



4 a.





4 b.



5 a.

5 b.

Name: \_\_\_\_\_ Date: \_\_\_\_\_



## Answer Key

1 a. rectangle

1 b. parallelogram

2 a. rectangle

2 b. rectangle

3 a. parallelogram

3 b. parallelogram

4 a. parallelogram

4 b. rectangle

5 a. square

5 b. square